



Exercícios: Função modular

Construa os gráficos das seguintes funções reais:

1. $f(x) = |2x - 1|$

2. $f(x) = |2 - 3x|$

3. $f(x) = |x^2 + 4x|$

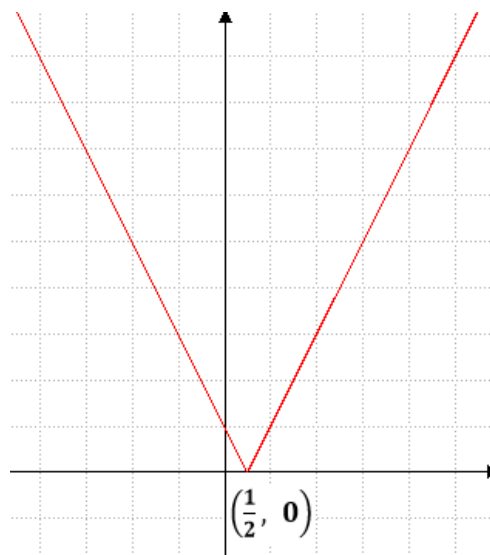
4. $f(x) = |x^2 - 3x + 2|$

5. $f(x) = |2x - 1| - 2$

6. $f(x) = |3x - 4| + 1$

7. $f(x) = |x^2 - 1| - 2$

Gabarito:



1.

8. $f(x) = |x - 3| + x + 2$



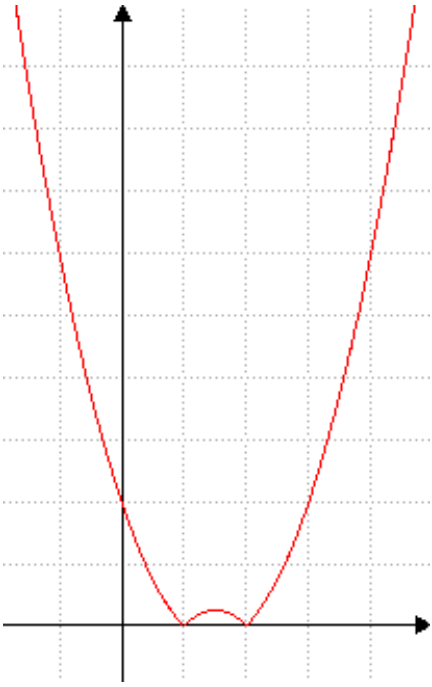
2.

9. $f(x) = |2x - 1| + x - 2$

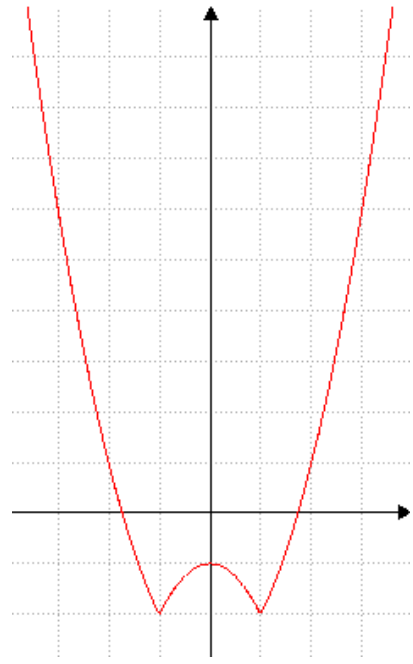


3.

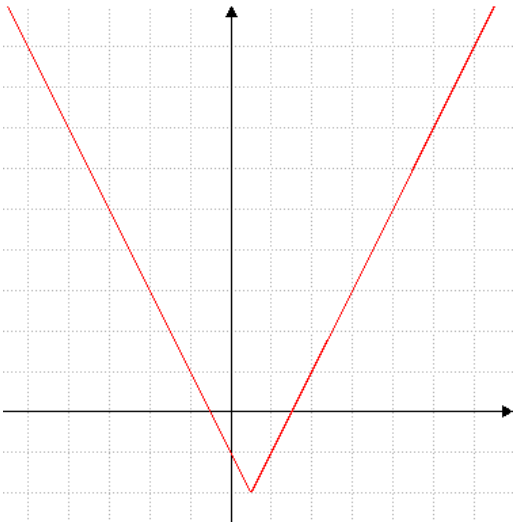
4.



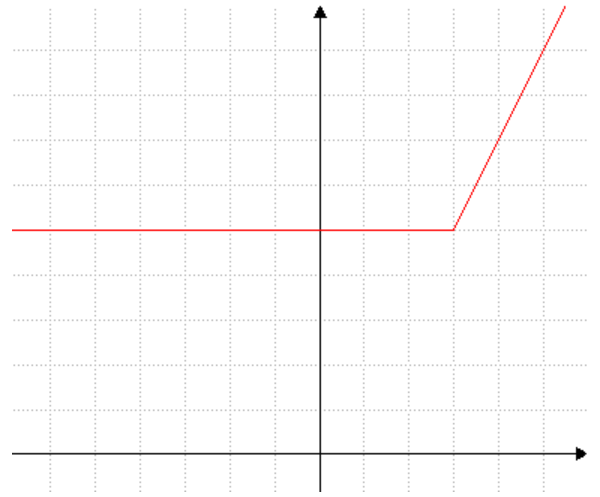
7.



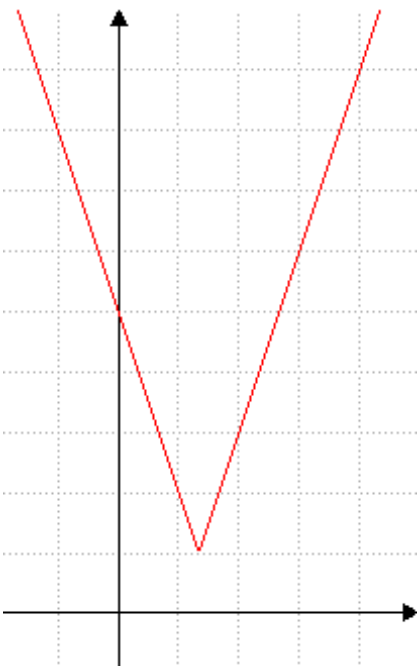
5.



8.



6.



9.

