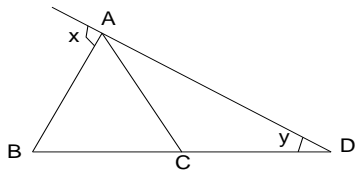


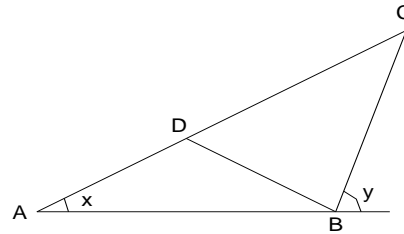
TRIÂNGULOS – PARTE 5

Q1) Determine o valor de x em função de y , nas figuras abaixo:

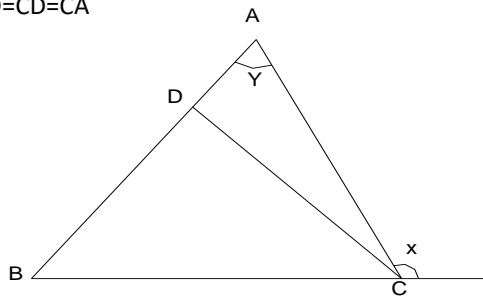
a) $AB=AC=CD$



b) $AD=DB=BC$



c) $BD=CD=CA$



d)

