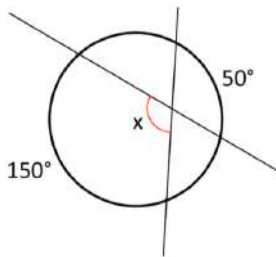


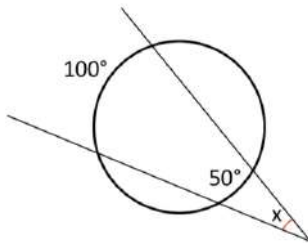
Exercícios: Circunferência

Determine o valor do ângulo X em cada caso:

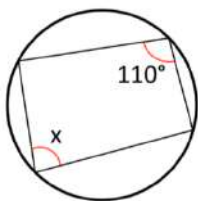
1.



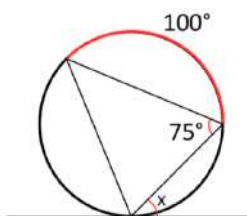
2.



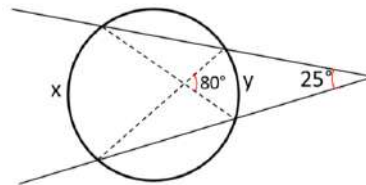
3.



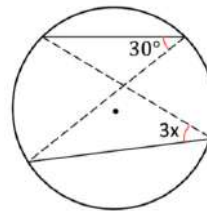
4.



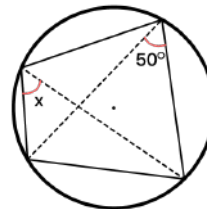
5. Determine as medidas de x e y.



6. Determine o valor do ângulo x:



7. Determine o valor de x:



GABARITO:

1. 100°
2. 25°

3. 70°
4. 55°
5. 105° e 55°
6. 10°

7. 50°