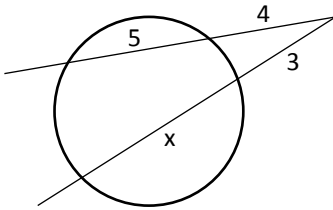


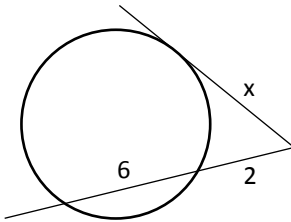
Exercícios: Potência de Ponto

Em cada caso, determine a incógnita:

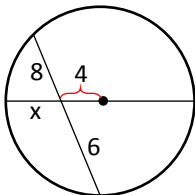
1.



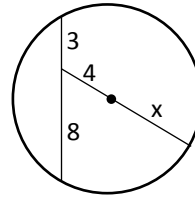
2.



3.

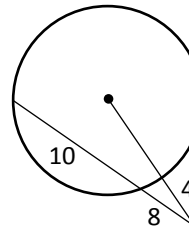


4.

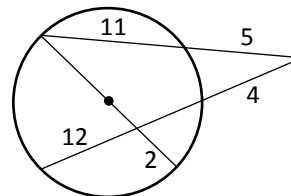


Determine o raio do círculo em cada caso:

5.



6.



GABARITO:

1. 9
2. 4

3. 4
4. $2\sqrt{10}$
5. 16

6. 13