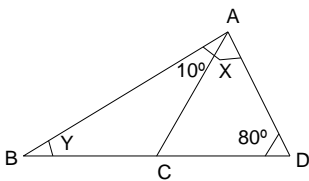


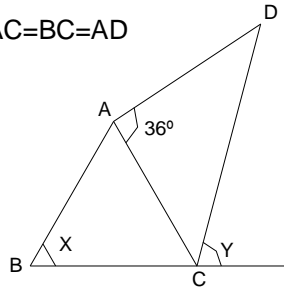
TRIÂNGULOS – PARTE 3

Q1) Determine os valores de x e y nos triângulos abaixo:

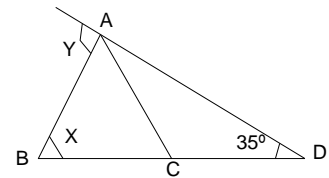
a) $AC=AD$



B) $AB=AC=BC=AD$

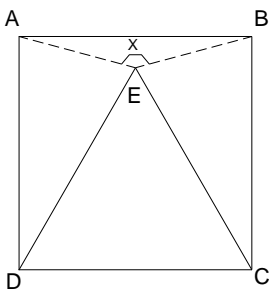


C) $AB=AC=CD$



Q2) Determine os valores de x nas figuras abaixo:

a) $ABCD$ é um quadrado
 DCE é um triângulo equilátero



b) $ABCD$ é um quadrado.
 BCE é um triângulo equilátero.

